






**Army Public School**  
**Annual Examination 2022-23**  
**Class 1**  
**Subject – Computer**




**Time: 1 hour**


**Name:** \_\_\_\_\_ **Section:** \_\_\_\_\_ **Roll No:** \_\_\_\_\_

**A. Draw and colour the shape that comes next in the pattern. (1x10=10)**




**B. Match the empty circles with numbers in the correct order from 1 to 10. (1x10=10)**

		
---	---	---



C. Draw and colour the shape that comes next.

(1x10=10)



\*\*\*\*\*